

2

Review Exercises

Section 2.1

2 In Exercises 1 and 2, use the following data set. The data set represents the income (in thousands of dollars) of 20 employees at a small business.

DATA

30 28 26 39 34 33 20 39 28 33
26 39 32 28 31 39 33 31 33 32

1. Make a frequency distribution of the data set using five classes. Include the class midpoints, limits, boundaries, frequencies, relative frequencies, and cumulative frequencies.
2. Make a relative frequency histogram using the frequency distribution in Exercise 1. Then determine which class has the greatest relative frequency and which has the least relative frequency.

3 In Exercises 3 and 4, use the following data set. The data represent the actual liquid volume (in ounces) in 24 twelve-ounce cans.

DATA

11.95 11.91 11.86 11.94 12.00 11.93 12.00 11.94
12.10 11.95 11.99 11.94 11.89 12.01 11.99 11.94
11.92 11.98 11.88 11.94 11.98 11.92 11.95 11.93

3. Make a frequency histogram using seven classes.
4. Make a relative frequency histogram of the data set using seven classes.

4 In Exercises 5 and 6, use the following data set. The data represent the number of meals purchased during one night's business at a sample of restaurants.

DATA

153 104 118 166 89 104 100 79 93 96 116
94 140 84 81 96 108 111 87 126 101 111
122 108 126 93 108 87 103 95 129 93

5. Make a frequency distribution with six classes and draw a frequency polygon.
6. Make an ogive of the data set using six classes.

Section 2.2

5 In Exercises 7 and 8, use the following data set. The data represent the average daily high temperature (in degrees Fahrenheit) during the month of January for Chicago, Illinois. (Source: National Oceanic and Atmospheric Administration)

DATA

33 31 25 22 38 51 32 23 23 34 44 43 47 37 29 25
28 35 21 24 20 19 23 27 24 13 18 28 17 25 31

7. Make a stem-and-leaf plot of the data set. Use one line per stem.
8. Make a dot plot of the data set.
9. The following are the heights (in feet) and the number of stories of nine notable buildings in Miami. Use the data to construct a scatter plot. What type of pattern is shown in the scatter plot? (Source: Skyscrapers.com)

Height (in feet)	764	625	520	510	484	480	450	430	410
Number of stories	55	47	51	28	35	40	33	31	40

10. The U.S. unemployment rate over a 12-year period is given. Use the data to construct a time series chart.

Year	1992	1993	1994	1995	1996	1997
Unemployment rate	7.5	6.9	6.1	5.6	5.4	4.9
Year	1998	1999	2000	2001	2002	2003
Unemployment rate	4.5	4.2	4.0	4.7	5.8	6.0

In Exercises 11 and 12, use the following data set. The data set represents the top seven American Kennel Club registrations (in thousands) in 2003.

Breed	Labrador Retriever	Golden Retriever	Beagle	German Shepherd	Dachshund	Yorkshire Terrier	Boxer
Number registered (in thousands)	145	53	45	44	39	38	34

- Make a Pareto chart of the data set.
- Make a pie chart of the data set.

Section 2.3

13. Find the mean, median, and mode of the data set.

9 7 8 6 9 12 11 5 9 10

14. Find the mean, median, and mode of the data set.

28 35 29 29 33 32 29 33 31 29

15. Estimate the mean of the frequency distribution you made in Exercise 1.

16. The following frequency distribution shows the number of magazine subscriptions per household for a sample of 60 households. Find the mean number of subscriptions per household.

Number of magazines	0	1	2	3	4	5	6
Frequency	13	9	19	8	5	2	4

17. Six test scores are given. The first five test scores are 15% of the final grade, and the last test score is 25% of the final grade. Find the weighted mean of the test scores.

65 72 84 89 70 90

18. Four test scores are given. The first three test scores are 20% of the final grade, and the last test score is 40% of the final grade. Find the weighted mean of the test scores.

81 95 89 87

- Describe the shape of the distribution in the histogram you made in Exercise 3. Is the distribution symmetric, uniform, or skewed?
- Describe the shape of the distribution in the histogram you made in Exercise 4. Is the distribution symmetric, uniform, or skewed?

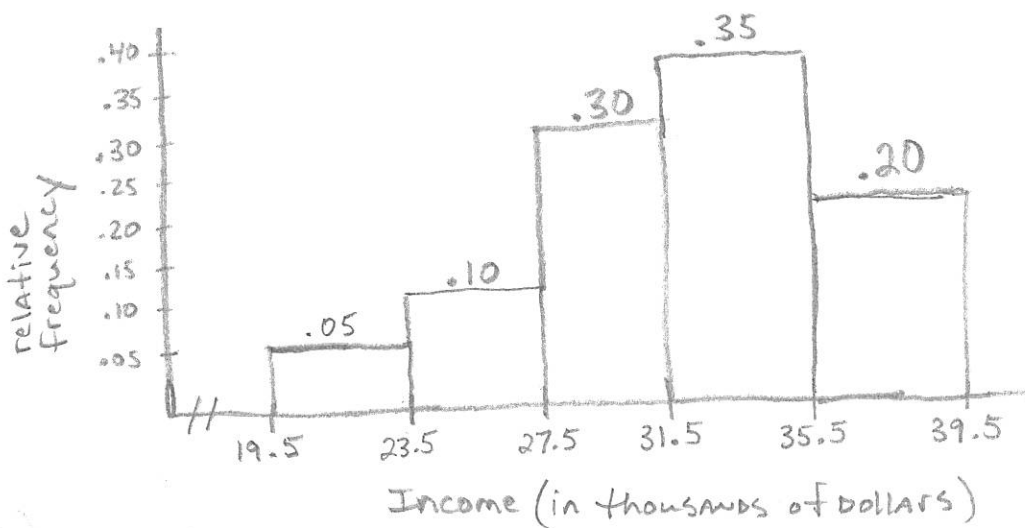
2.1 - 2.2 Quiz Review

1.) $n = 20$ CLASS WIDTH = $\frac{39 - 20}{5} = \frac{19}{5} = 3.8 \approx \boxed{4}$

CLASSES	BOUNDARIES	frequency	relative F	cumulative F
20 - 23	19.5 - 23.5	1	$1/20 = .05$	1
24 - 27	23.5 - 27.5	2	$2/20 = .10$	3
28 - 31	27.5 - 31.5	6	$6/20 = .30$	9
32 - 35	31.5 - 35.5	7	$7/20 = .35$	16
36 - 39	35.5 - 39.5	4	$4/20 = .20$	20

$\Sigma F = 20$

2.) Relative Frequency histogram



32-35 greatest rel. frequency

20-23 least rel. frequency.

3.)

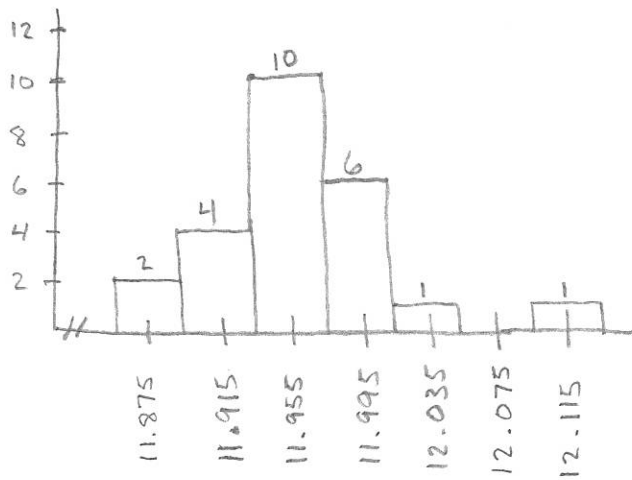
CLASSES	BOUNDARIES	F	relative frequency	midpt
11.86 - 11.89	11.855 - 11.895	2	$2/24 = .08$	11.875
11.90 - 11.93	11.895 - 11.935	4	$4/24 = .17$	11.915
11.94 - 11.97	11.935 - 11.975	10	$10/24 = .42$	11.955
11.98 - 12.01	11.975 - 12.015	6	$6/24 = .25$	11.995
12.02 - 12.05	12.015 - 12.055	1	$1/24 = .04$	12.035
12.06 - 12.09	12.055 - 12.095	0	$0/24 = 0$	12.075
12.10 - 12.13	12.095 - 12.135	1	$1/24 = .04$	12.115
		$\Sigma F = 24$		

$n = 24$

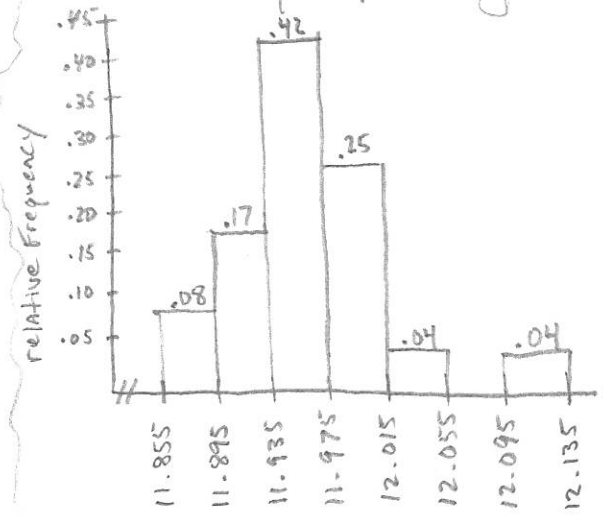
CW = $\frac{12.10 - 11.86}{7} \approx \boxed{.04}$

< over >

3.) (continued) Frequency histogram



4.) Relative Frequency Histogram



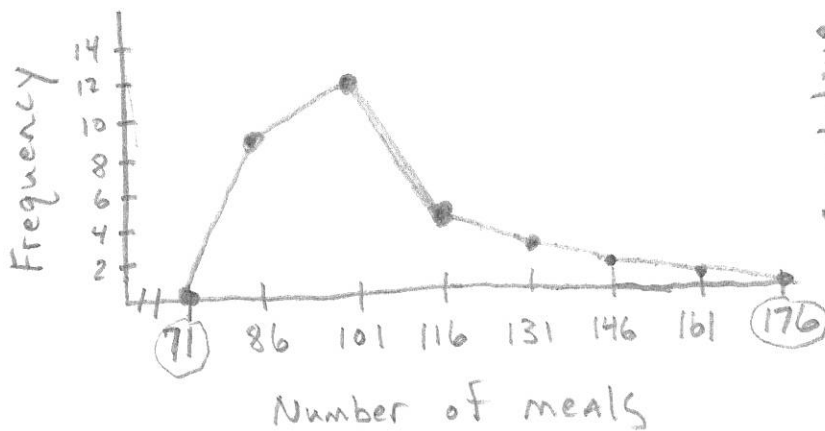
5+6.)

Classes	boundaries	midpt	F	relative F	cumulative f
79-93	78.5-93.5	86	9	$9/32 = .28$	9
94-108	93.5-108.5	101	12	$12/32 = .38$	21
109-123	108.5-123.5	116	5	$5/32 = .16$	26
124-138	123.5-138.5	131	3	$3/32 = .09$	29
139-153	138.5-153.5	146	2	$2/32 = .06$	31
154-168	153.5-168.5	161	1	$1/32 = .03$	32
			$\Sigma f = 32$		

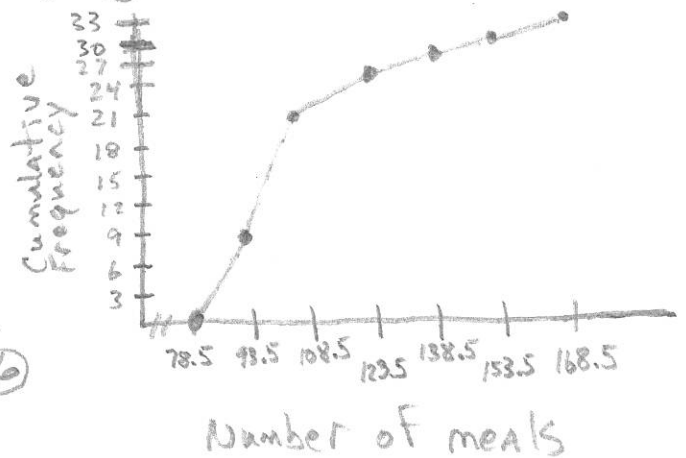
$n = 32$

$CW = \frac{166-79}{6} = \boxed{15}$

Frequency Polygon



6.) Ogive (Cumulative frequency polygon)




71 → Subtract the class width (15) from the first midpoint

176 → Add the class width (15) to the last midpoint

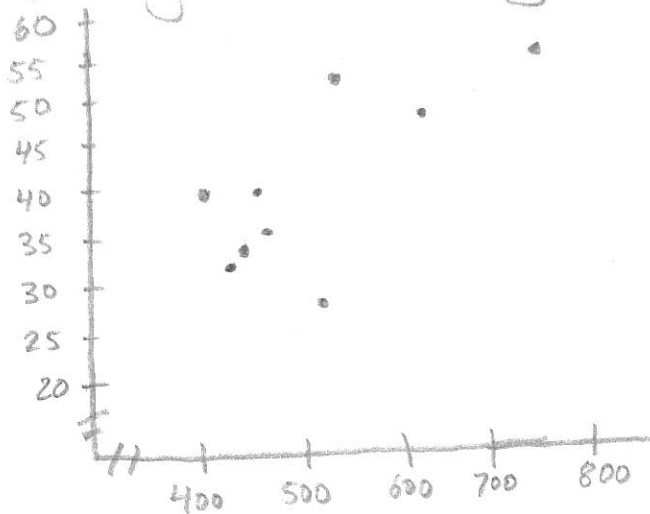
7.)

1	3	7	8	9											
2	0	1	2	3	3	3	4	4	5	5	5	7	8	8	9
3	1	1	2	3	4	5	7	8							
4	3	4	7												
5	1														

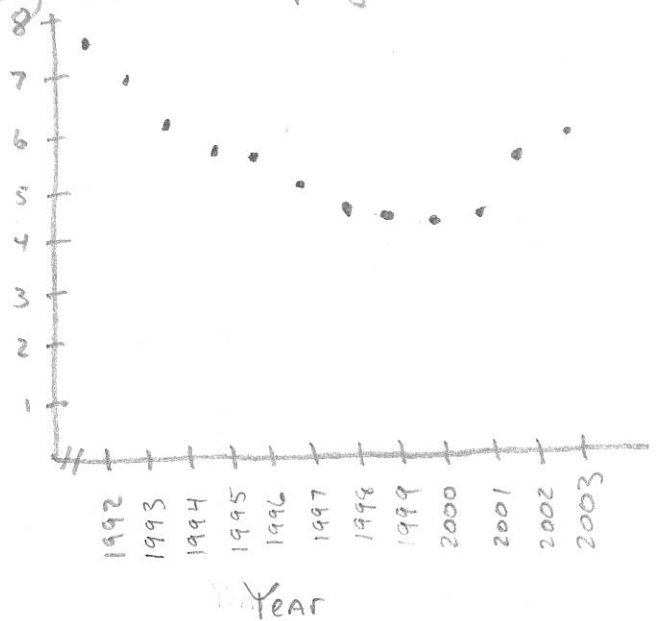
8.) Average Daily Highs



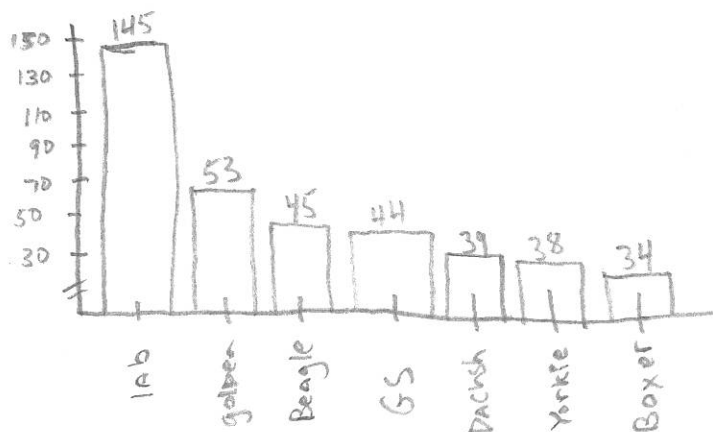
9.) Height of Buildings



10.) U.S. Unemployment Rate



11.) American Kennel Club



12.) American Kennel Club

